

Screening test for General Apprentice 10-06-2025

Time: 1hr

Mark: 50

(Each question carries 1 mark. There is no negative mark)

Q1. Arrange 1,2,3,4 to complete the sentence "When he....."

- 1 : did not know
- 2 : he was nervous and
- 3 : heard the hue and cry at midnight
- 4 : what to do

A. 3 2 1 4 B. 2 4 1 3 C. 4 2 1 3 D. 1 2 3 4

Q2. Arrange 1,2,3,4 to complete the sentence "I read an advertisement that said"

- 1 : posh, air-conditioned
- 2 : gentleman of taste
- 3 : are available for
- 4 : fully furnished rooms

A. 1 2 3 4 B. 1 4 3 2 C. 1 4 2 3 D. 4 3 1 2

Q3. Arrange 1,2,3,4 to complete the sentence "....."

- 1. Facebook is a
- 2. with his college roommates
- 3. founded by Mark Zuckerberg
- 4. social networking service

A. 2 3 4 1 B. 1 3 4 2 C. 1 4 3 2 D. 4 1 3 2

Q4. Fill the blank complete the sentence "The doctor gave me a prescription _____ my cough."

A. for B. with C. at D. to

10/06/2025
Hing. Lypal.

10/06/2025
Hing. Lypal.

10/06/2025
Hing. Lypal.

10/06/2025
Hing. Lypal.

Q5. Fill the blank complete the sentence "He gave a talk _____ the causes of dengue fever."

- A. of B. on C. for D. off

Q6. Fill the blank complete the sentence "You can see the doctor _____ 8 am and 12 noon."

- A. at B. in C. between D. On

Q7. Correct the bolded part "Your admission into this university **will be dependent** on the marks you score in the entrance examination."

- A. is depending B. depends C. will depend D. Depending

Q8. Correct the bolded part "Merit is the only **criteria which is adapted** in the selection of candidates."

- A. criterion which is adapted B. criterion that is adopted
C. criterion that is adapted D. criterion what is adopted is

Q9. Correct the bolded part "Since the Chief Minister did not **approve with** their demands,
the employees decided to intensify their strike.

- A. approve of B. approve in C. approve on D. approve at

Q10. A life story of a person written by him is called _____

- A. Biography. B. Climax. C. Autobiography. D. Catastrophe.

Q11. One who talks of his own achievements is called _____

- A. Egomaniac. B. Egotist. C. Boastful. D. Proud.

Handwritten signature

Handwritten signature

Handwritten signature

Handwritten signature

Q12. One who can use either hand with the same ease is called _____

- A. Ambidextrous. B. Dexterous. C. Ambiguous. D. Ambient.

Q13. Find the odd one out from the given set of numbers. 14, 28, 35, 46, 56, 84

- A. 28 B. 35 C. 46. D. 56

Q14. If 'white' is called 'yellow', 'yellow' is called 'blue', 'blue' is called 'red', 'red' is called 'black', 'black' is called 'violet' and 'violet' is called 'green', then what would be the colour of light used to indicate slow down of vehicle in traffic signalling system

- A. Blue B. Red C. Yellow D. Black

Q15. If 'A&B' means A is father of B, 'A*B' means A is brother of B, 'A\$B' means A is mother of B then which of the following is correct about K\$T&M?

- A. M is brother of T B. T is son of K
C. M is father of T D. K is mother of M

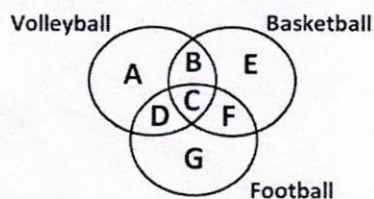
Q16. Find the next number in the series: 61, 52, 63, 94, 46, ?

- A. 18 B. 35 C. 49 D. 81

Q17. Identify the wrong number in the series. 0, 1, 1, 2, 3, 5, 8, 13, 20, 34?

- A. 8 B. 20 C. 13 D. 34

Q18. Which of the region in the following figure represents students who play Volleyball or Football or both but not Basketball?



- A. $A + D + G$ B. $A + G - D$ C. $A + C + D$ D. $D + G - D$

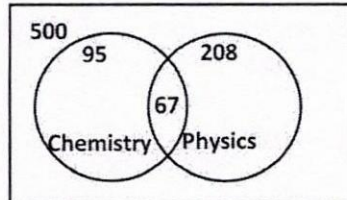
*1976 boys
Hary shan*

Shrey Gopal

*Ankur
Archan Rayin*

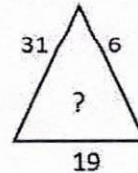
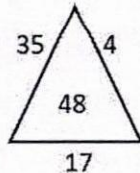
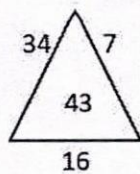
manu. as

Q19. From the figure given below, determine the number of students who did not study any of the two subjects.



- A. 130 B. 175 C. 230 D. 264

Q20. Find the correct alternative which will replace the question mark?



- A. 49 B. 33 C. 27 D. 44

Q21. What does NDRF stand for?

- A. National Disaster Response Fund B. National Disaster Response Force
C. National Disaster Relief Force D. National Disaster Relief Fund

Q22. India's first fully solar energy powered airport is located in _____?

- A. Cochin B. Kozhikode C. Kannur D. Vizhinjam

Q23. Who is the first education minister in Kerala?

- A. P. P. Ummer Koya B. R. Sankar
C. Joseph Mundassery D. C. H. Mohammed Koya

Handwritten signature
mms. 13

Handwritten signature
10/6/2018

Handwritten signature
10/6/18
Thangappal

Handwritten signature
Anil Kumar Ramesh

Q24. What does IMF stand for?

- | | |
|--------------------------------|------------------------------|
| A. International Monetary Fund | B. Indian Monetary Fund |
| C. Indian Monetary Force | D. Internal Monitoring Force |

Q25. The name of spacecraft which will be used for India's manned space mission:

- | | |
|---------------|----------------|
| A. Mangalyaan | B. Chandrayaan |
| C. Gaganyaan | D. Somayaan |

Q26. Who is the first Malayali wins Oscar:

- | | |
|-------------------|--------------------|
| A. Rasul Pookutty | B. A.R. Rahman |
| C. K.J Yesudas | D. P. Jayachandran |

Q27. Who is called the father of Malayalam Cinema

- | | |
|----------------|-------------------|
| A. S. Notani | B. P.V Rao |
| C. J.C, Daniel | D. P. Subramanian |

Q28. Which is the largest lake in Kerala?

- | | |
|----------------------|-------------------|
| A. Pookodu lake | B. Ashtamudi lake |
| C. Sasthamkotta lake | D. Vembanadu lake |

Q29. For which of the following discipline Nobel price is not awarded:

- | | | | |
|------------|--------------|----------------|-------------|
| A. Physics | B. Chemistry | C. Mathematics | D. Medicine |
|------------|--------------|----------------|-------------|

Q30. In computer system OS is the abbreviation for _____.

- | | |
|--------------------------|---------------------|
| A. Order of Significance | B. Operating system |
| C. Open software | D. Optical Sensor |

10/06/2020
Shang. Gopal

Shang. Gopal

Ankur
Ankur Rajan

Shang. Gopal

Q31. What is 'staffing' in an organisation?

- A. The way an executives issues instructions to his subordinate
- B. Combining the works done by an individual
- C. Selection of people for the various jobs
- D. Preparation of hierarchy in an organisation

Q32. What do you mean by 'inventory'?

- A. List of items in stock
- B. Invention of new products
- C. Transport of finished items
- D. Purchasing of goods

Q33. A dog takes 4 leaps for every 5 leaps of a hare but 3 leaps of a dog is equal to 4 leaps of the hare. Ratio of speeds of dog to hare is:

- A. 13:14
- B. 15: 32
- C. 16:15
- D. 25:32

Q34. P is the son of Q. R is Q's sister has a son S and daughter T. U is the maternal uncle of S. How is P related to S?

- A. Cousin
- B. Nephew
- C. Uncle
- D. Brother

Q35. Which organisation replaced The Planning Commission of India?

- A. PradhanMantri Jan DhanYojana
- B. NITI Ayog
- C. Rashtriya Swasthya Bima Yojana
- D. National Service Scheme

Q36. Which article of the constitution provide freedom to religious affairs _____.

- A. Article 24
- B. Article 25
- C. Article 26
- D. Article 27

[Signature]

[Signature]
10/06/25

[Signature]
10/06/25
Shreya Gopal

[Signature]
Anshu Rajin

Q37. Highest law officer of an Indian state:

- A. Attorney General
- B. Advocate General
- C. Additional General
- D. Solicitor General

Q38. What is the advantage of planning for an emergency

- A. For the sake of formalities
- B. To save life and property
- C. For inspection
- D. For record

Q39. Which of the following is a non-verbal means of communication?

- A. E mail
- B. Telephone
- C. Letter
- D. Body language

Q40. What is the primary duty of an office attendant?

- A. Supporting daily routine office functions
- B. Assisting in administrative tasks
- C. Performing clerical duties
- D. Taking decisions on office policy

Q41. Which shortcut key is used to copy in MS Word?

- A. Ctrl + X
- B. Ctrl + V
- C. Ctrl + C
- D. Ctrl + Z

Q42. What kind of file uses the ".mpg" in digital

- A. Word Perfect document file
- B. Microsoft Office Word file
- C. Movie file
- D. Image file

Q43. What is 25% of 200?

- A. 25
- B. 30
- C. 50
- D. 100

10/06/2015
Shweta

10/06/2015
Shweta

Anshu
Anshu Lajin

10/06/2015
Shweta

Q44. What is the LCM of 4 and 6?

- A. 24 B. 12 C. 8 D. 6

Q45. Which of the following is a prime number?

- A. 11 B. 15 C. 18 D. 21

Q46. A number divided by 5 gives 9. What is the number?.

- A. 30 B. 35 C. 40 D. 45

Q47. A leap year has how many days?

- A. 363 B. 364 C. 365 D. 366

Q48. If $a+b=10$ and $a-b=4$, then the value of a is:

- A. 7 B. 10 C. 14 D. 21

Q49. The probability of getting a head when tossing a fair coin is

- A. 0.25 B. 0.5 C. 1 D. 2

Q50. Find the two numbers of 3 digits each of whose HCF is 310 and LCM is 1860.

- A. 620,930 B. 240,540 C. 720,130 D. 360, 180

Benjamin
10/06/2015

10/06/2015
10/06/2015

10/06/2015
10/06/2015

10/06/2015
10/06/2015

Answer key General apprentice 2025

1	A		14	A		27	C		39	D
2	B		15	B		28	D		40	A
3	C		16	A		29	C		41	C
4	A		17	B		30	B		42	C
5	B		18	A		31	C		43	C
6	C		19	D		32	A		44	B
7	C		20	D		33	C		45	A
8	B		21	B		34	A		46	D
9	A		22	A		35	B		47	D
10	C		23	C		36	C		48	A
11	B		24	A		37	B		49	B
12	A		25	C		38	B		50	A
13	C		26	A						


Dhanya Gopal.


Manoj Kumar.


Anshu Rajan.